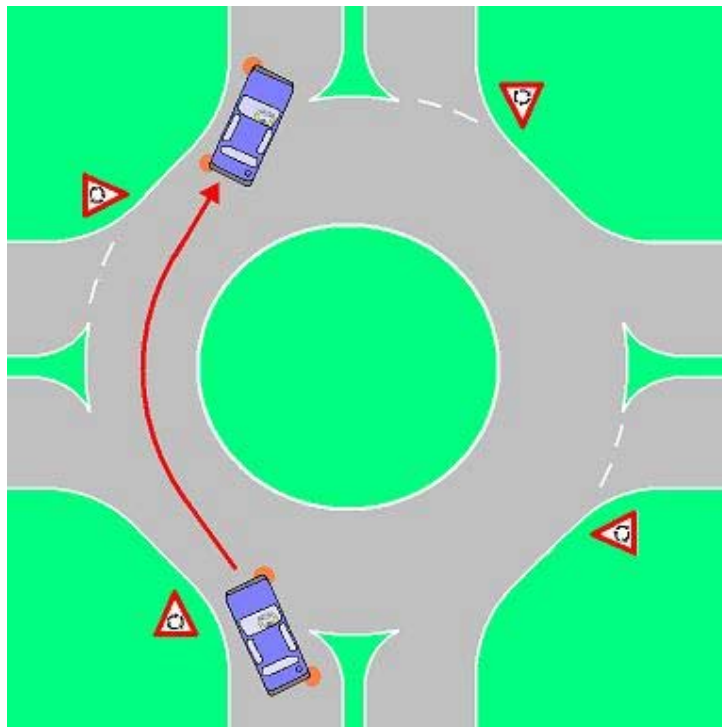


Quiz

1. **Under what circumstances can the vehicle have the words**

- A. The words can be written on the Registration Plate of a new vehicle for a period of one month from the date of purchase until the permanent registration mark is assigned.
- B. The words can be written on the Registration Plate of a new vehicle for a period of two months from the date of purchase until the permanent registration mark is assigned.
- C. The words are to be written only if no Temporary Registration Mark has been assigned to the vehicle and that too only for a period of one month from the date of purchase.
- D. The words are not to be written on the Registration Plate at all and only the Temporary Registration Mark is to be displayed until the permanent registration mark is assigned.

2. **Is the use of indicator by the driver of the car driving through the rotary correct?**



- A. Yes.
- B. No, he should not have given the right indicator when entering the rotary.
- C. No, he should not have given the left indicator when exiting the rotary.
- D. No, he should not have used the indicator at all.

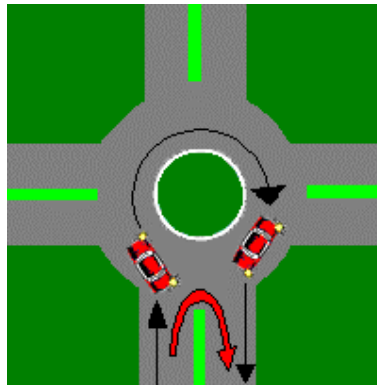
3. **The driver of every four-wheeler has to ensure that the following items are carried in the vehicle:**

- A. Spare Bulbs for Headlamp & Spare Fuses.
- B. Spare Wheel, Tool Kit, First-Aid Kit & Triangles with a Red reflecting surface for keeping in front & rear of vehicle in case the vehicle is stranded on the road.
- C. Chock Blocks to prevent rolling of parked vehicle on inclines.

D. All of the above.



4. In the illustration which is/are the path (s) that may be adopted by the car driver for taking a U-Turn around the Roundabout?



A. Path indicated by Red Arrow.



B. Path indicated by Black Arrow.



C. Either of the two paths may be adopted.



D. Path indicated by Black Arrow can be adopted at all times. Path indicated by Red Arrow can be adopted only when traffic is blocking the path indicated by the Black Arrow.



5. What should be the maximum speed of your vehicle (in kilometres per hour) as per law when passing workmen engaged in road repair:

A. 35.



B. 45.



C. 15.



D. 25.



6. The driver of a motor cycle which has provision for pillion rider shall ensure that the motor cycle has the following fixtures:

A. Permanent Hand Grip on the side/ behind driver



B. Protective covering for the rear wheel to prevent entanglement of pillion rider



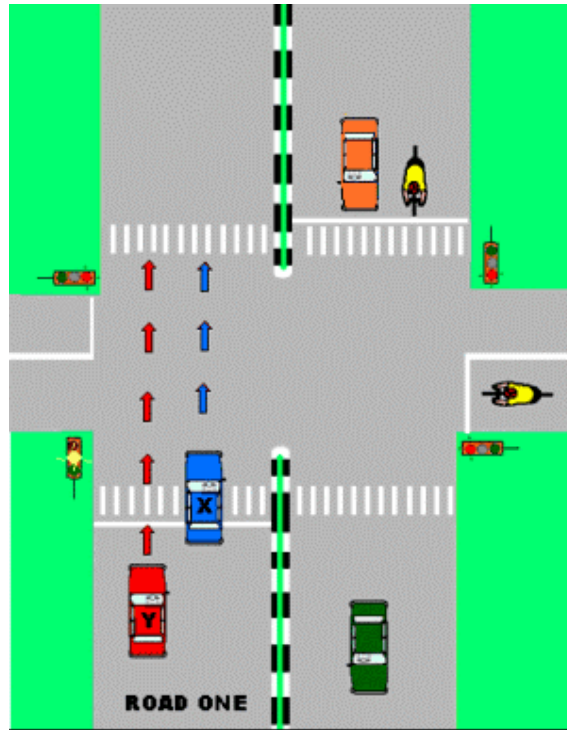
C. Both



D. None of the above.

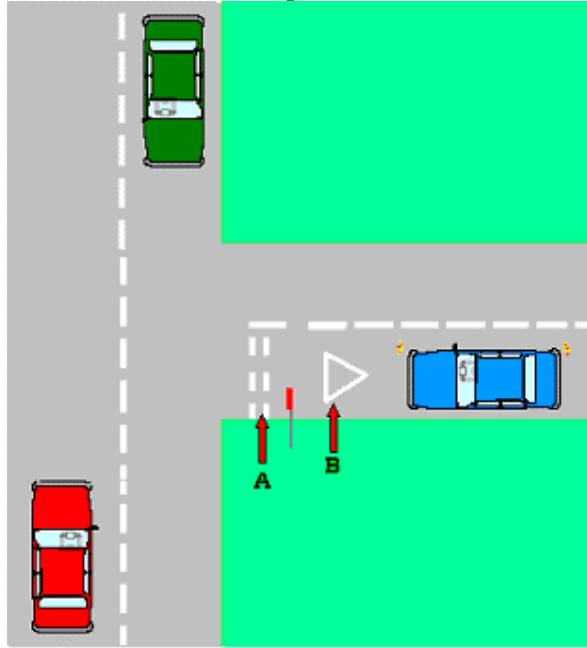


7. In the illustration the traffic signal has changed from GREEN to AMBER (Yellow) for traffic on Road One. What should be the response of drivers of Car X (Blue) and Car Y (Red)?



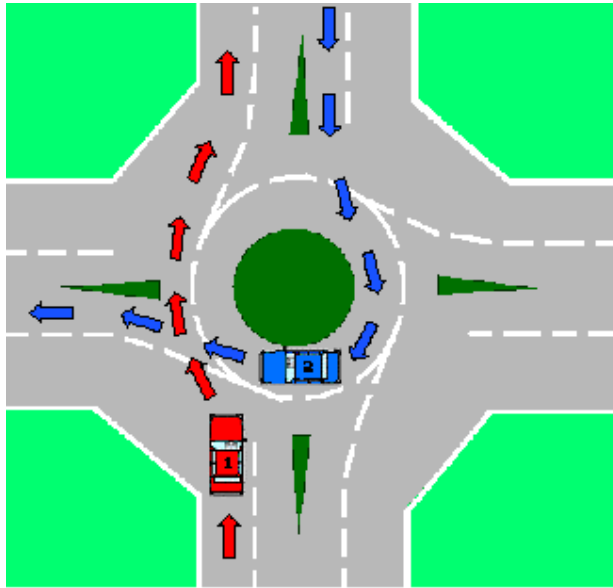
- A. Drivers of both cars should immediately brake and stop their cars. Driver of Car X should reverse so that the car does not violate the Stop Line.
- B. Drivers of both cars should drive on and cross the road in the direction indicated by the arrows as the signal is red for traffic on all other roads.
- C. Drivers of both cars may either brake and stop or speed on and cross the road as there is no hard and fast rule for Amber Signal.
- D. Driver of Car X has crossed the Stop Line and has traffic following it in the rear and so must drive on cautiously through the crossing in the direction indicated by the arrows. The driver of Car Y, however, must brake safely and stop the car before th

8. In the illustration what do the road markings shown at



- A. Traffic is required to stop at the double-lines marked at
- B. Traffic must yield the Right of Way to the traffic plying on the main road and is not required to stop compulsorily at the double-lines marked at
- C. The road markings prohibit the traffic from entering the main road.
- D. The road markings require the traffic to proceed cautiously at a slow speed when entering the main road.

9. In the illustration which of the two which of the two - the driver of the Blue Car or the driver of the Red Car has the Right of Way?



- A. The driver of the Red Car.
- B. The driver of the Blue Car.
- C. The driver of the faster vehicle.
- D. Whoever flashes the headlight first.



10. What does this sign mean?



- A. Hospital ahead, be careful & do not create noise.
- B. Resting place ahead



C. Blow horn, a patient might be crossing the road.



D. First aid post

